

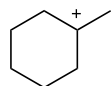
Quiz 2 (Monday morning)

Name:

Recitation Instructor:

The following quiz is 20 points. You have 20 minutes to complete it. Good Luck!

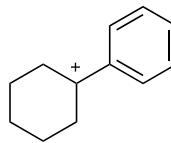
1. Which of the following is the most stable, and what is the least stable. Briefly explain your answer. (5 points)



\_\_\_\_\_

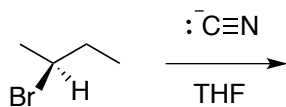


\_\_\_\_\_



\_\_\_\_\_

2. Predict the product(s) for the following SN2 Reaction. (5 points)



3. Show a reaction mechanism for the following interconversion *in both directions*. (10 points)

